

Name _____

Mark the best answer.

1. Count the nickels by 5s.

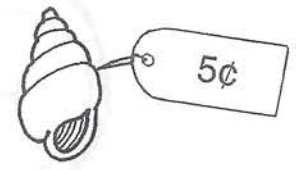
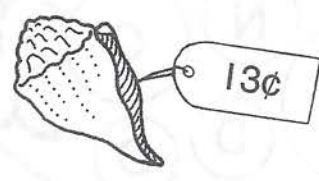
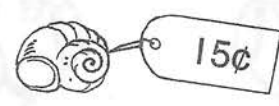


5¢	10¢	_____¢
_____¢	_____¢	_____¢

2. Circle the coins that Jeannine can use to buy the doll.



3. Nicholas spends 28¢.
Circle the shells he buys.



4. Autumn has 25¢.
Label Autumn's coins.

